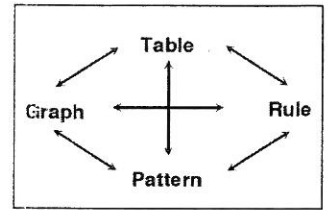


Using the pattern web at right, find the missing 3 pieces for each of the following.  
Use graph paper when graphing your pattern and creating your graph.



1.  
Rule:  $y=4x+2$

Table

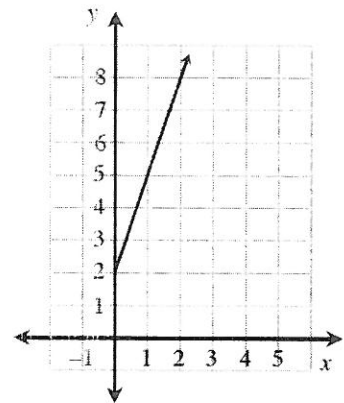
2.  
Rule:

Table

X	1	2	3	4	5
Y	6			15	

3.  
Rule:

Table



4.  
Rule:

Table

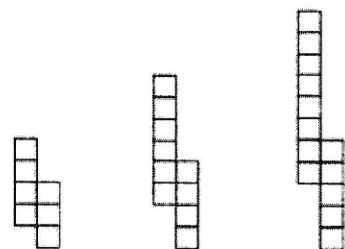


Figure 1      Figure 2      Figure 3